


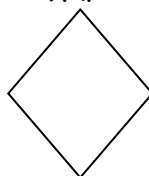
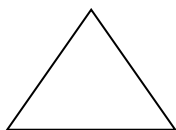

ΟΝΟΜΑ: \_\_\_\_\_

ΗΜΕΡΟΜΗΝΙΑ: \_\_\_\_\_

## ΜΑΘΗΜΑΤΙΚΑ 1<sup>η</sup> ΕΝΟΤΗΤΑ

### ΚΕΦ. 3: ΓΕΩΜΕΤΡΙΚΑ ΣΧΗΜΑΤΑ ΚΑΙ ΣΤΕΡΕΑ ΣΩΜΑΤΑ

1. Να ονομάσετε τα παρακάτω γεωμετρικά σχήματα:

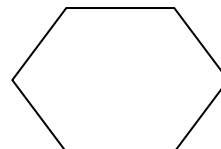


.....

.....

.....

.....





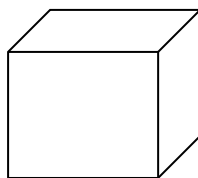
.....

.....

.....

.....

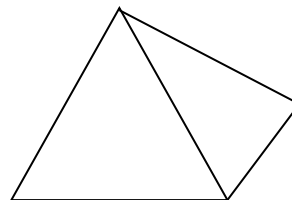
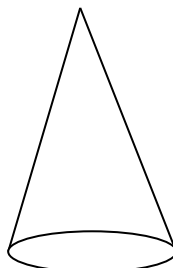

2. Να ονομάσετε τα παρακάτω γεωμετρικά στερεά σώματα:



.....

.....

.....




.....


.....

.....

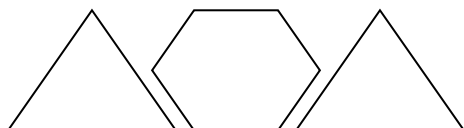
3. Να περιγράψετε τις παρακάτω εικόνες, όπως στο παράδειγμα:



Ένας ρόμβος ανάμεσα σε δυο κύκλους.

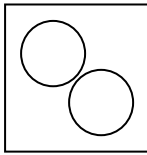


.....

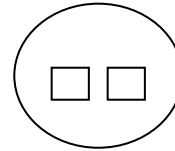
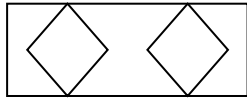


.....

4. Να περιγράψετε τα παρακάτω σχήματα, όπως στο παράδειγμα:

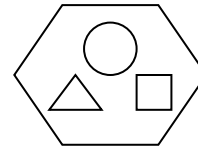
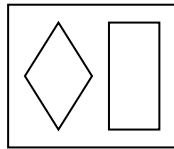


Δύο κύκλοι μέσα σε ένα τετράγωνο.



.....  
.....

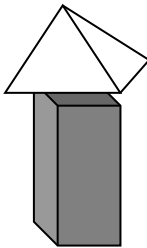
.....  
.....



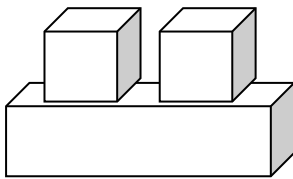
.....  
.....

.....  
.....

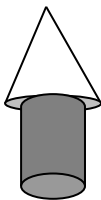
5. Να περιγράψετε τα παρακάτω σχήματα:



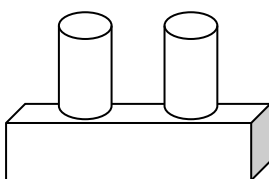
.....



.....  
.....



.....



.....