

ΟΝΟΜΑ: \_\_\_\_\_

## ΜΑΘΗΜΑΤΙΚΑ 2<sup>η</sup> ΕΝΟΤΗΤΑ

### Επανάληψη στα ζευγαράκια 6,7,8,9,10

1. Γράφω τα ζευγαράκια του 6, του 7 και του 8.

6

7

8

$0 + 6 = 6$

$0 + 7 = 7$

$0 + 8 = 8$

$\square + \square = \square$

$\square + \square = \square$

$\square + \square = \square$

$\square + \square = \square$

$\square + \square = \square$

$\square + \square = \square$

$\square + \square = \square$

$\square + \square = \square$

$\square + \square = \square$

$\square + \square = \square$

$\square + \square = \square$

$\square + \square = \square$

$\square + \square = \square$

$\square + \square = \square$

$\square + \square = \square$

$\square + \square = \square$

$\square + \square = \square$

$\square + \square = \square$

$\square + \square = \square$

$\square + \square = \square$

$\square + \square = \square$

$\square + \square = \square$

2. Γράφω τα ζευγαράκια του 9 και του 10.

9

10

$0 + 9 = 9$

$0 + 10 = 10$

$\square + \square = \square$

$\square + \square = \square$

$\square + \square = \square$

$\square + \square = \square$

$\square + \square = \square$

$\square + \square = \square$

$\square + \square = \square$

$\square + \square = \square$

$\square + \square = \square$

$\square + \square = \square$

$\square + \square = \square$

$\square + \square = \square$

$\square + \square = \square$

$\square + \square = \square$

$\square + \square = \square$

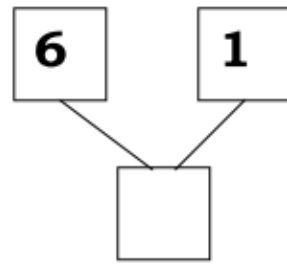
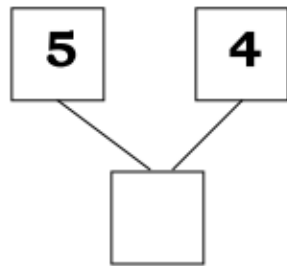
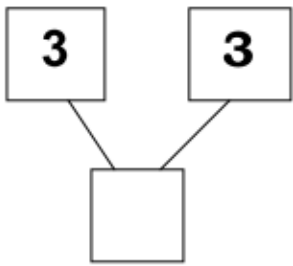
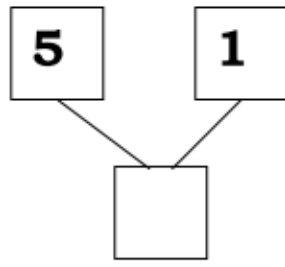
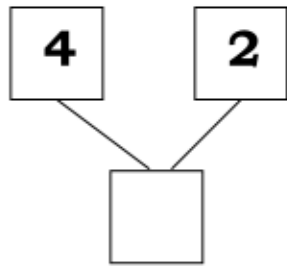
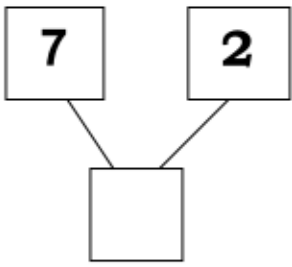
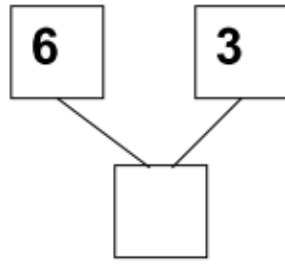
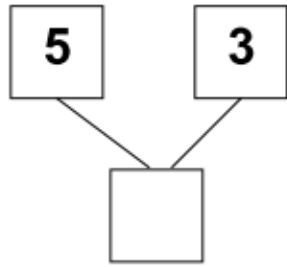
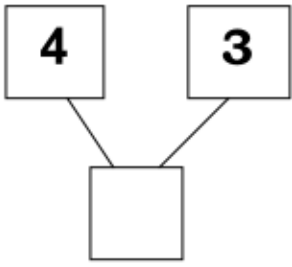
$\square + \square = \square$

$\square + \square = \square$

$\square + \square = \square$

$\square + \square = \square$

3. Λογαριάζω πόσο κάνουν τα ζευγαράκια.



Για να το βρεις πιο εύκολα κρύψε στο μυαλό σου τον μεγαλύτερο αριθμό. Θα σε βοηθήσουν τα ζευγαράκια από τις προηγούμενες ασκήσεις.



4. Ενώνω τις τελίτσες και βάφω την εικόνα.

