

ΟΝΟΜΑ: _____

ΜΑΘΗΜΑΤΙΚΑ 4^η ΕΝΟΤΗΤΑ

Επαναληπτικό: Κεφάλαια 24 - 29

1. Συμπληρώνω τις προπαίδειες.

$1 \times 2 = \underline{\quad}$

$2 \times 2 = \underline{\quad}$

$3 \times 2 = \underline{\quad}$

$4 \times 2 = \underline{\quad}$

$5 \times 2 = \underline{\quad}$

$6 \times 2 = \underline{\quad}$

$7 \times 2 = \underline{\quad}$

$8 \times 2 = \underline{\quad}$

$9 \times 2 = \underline{\quad}$

$10 \times 2 = \underline{\quad}$

$1 \times 3 = \underline{\quad}$

$2 \times 3 = \underline{\quad}$

$3 \times 3 = \underline{\quad}$

$4 \times 3 = \underline{\quad}$

$5 \times 3 = \underline{\quad}$

$6 \times 3 = \underline{\quad}$

$7 \times 3 = \underline{\quad}$

$8 \times 3 = \underline{\quad}$

$9 \times 3 = \underline{\quad}$

$10 \times 3 = \underline{\quad}$

$1 \times 4 = \underline{\quad}$

$2 \times 4 = \underline{\quad}$

$3 \times 4 = \underline{\quad}$

$4 \times 4 = \underline{\quad}$

$5 \times 4 = \underline{\quad}$

$6 \times 4 = \underline{\quad}$

$7 \times 4 = \underline{\quad}$

$8 \times 4 = \underline{\quad}$

$9 \times 4 = \underline{\quad}$

$10 \times 4 = \underline{\quad}$

$1 \times 5 = \underline{\quad}$

$2 \times 5 = \underline{\quad}$

$3 \times 5 = \underline{\quad}$

$4 \times 5 = \underline{\quad}$

$5 \times 5 = \underline{\quad}$

$6 \times 5 = \underline{\quad}$

$7 \times 5 = \underline{\quad}$

$8 \times 5 = \underline{\quad}$

$9 \times 5 = \underline{\quad}$

$10 \times 5 = \underline{\quad}$

$1 \times 6 = \underline{\quad}$

$2 \times 6 = \underline{\quad}$

$3 \times 6 = \underline{\quad}$

$4 \times 6 = \underline{\quad}$

$5 \times 6 = \underline{\quad}$

$6 \times 6 = \underline{\quad}$

$7 \times 6 = \underline{\quad}$

$8 \times 6 = \underline{\quad}$

$9 \times 6 = \underline{\quad}$

$10 \times 6 = \underline{\quad}$

$1 \times 7 = \underline{\quad}$

$2 \times 7 = \underline{\quad}$

$3 \times 7 = \underline{\quad}$

$4 \times 7 = \underline{\quad}$

$5 \times 7 = \underline{\quad}$

$6 \times 7 = \underline{\quad}$

$7 \times 7 = \underline{\quad}$

$8 \times 7 = \underline{\quad}$

$9 \times 7 = \underline{\quad}$

$10 \times 7 = \underline{\quad}$

$1 \times 8 = \underline{\quad}$

$2 \times 8 = \underline{\quad}$

$3 \times 8 = \underline{\quad}$

$4 \times 8 = \underline{\quad}$

$5 \times 8 = \underline{\quad}$

$6 \times 8 = \underline{\quad}$

$8 \times 8 = \underline{\quad}$

$8 \times 8 = \underline{\quad}$

$9 \times 8 = \underline{\quad}$

$10 \times 8 = \underline{\quad}$

$1 \times 9 = \underline{\quad}$

$2 \times 9 = \underline{\quad}$

$3 \times 9 = \underline{\quad}$

$4 \times 9 = \underline{\quad}$

$5 \times 9 = \underline{\quad}$

$6 \times 9 = \underline{\quad}$

$9 \times 9 = \underline{\quad}$

$8 \times 9 = \underline{\quad}$

$9 \times 9 = \underline{\quad}$

$10 \times 9 = \underline{\quad}$

$1 \times 10 = \underline{\quad}$

$2 \times 10 = \underline{\quad}$

$3 \times 10 = \underline{\quad}$

$4 \times 10 = \underline{\quad}$

$5 \times 10 = \underline{\quad}$



$6 \times 10 = \underline{\quad}$

$10 \times 10 = \underline{\quad}$

$8 \times 10 = \underline{\quad}$

$9 \times 10 = \underline{\quad}$

$10 \times 10 = \underline{\quad}$



2. Υπολογίζω τα γινόμενα.

$2 \times 3 = \square$

$3 \times 8 = \square$

$4 \times 5 = \square$

$5 \times 6 = \square$

$6 \times 7 = \square$

$7 \times 7 = \square$

$8 \times 9 = \square$

$9 \times 2 = \square$

$10 \times 1 = \square$

$5 \times 11 = \square$

$10 \times 10 = \square$

$3 \times 4 = \square$

$5 \times 5 = \square$

$3 \times 3 = \square$

$4 \times 6 = \square$

$2 \times 9 = \square$


$8 \times 0 = \square$

$11 \times 4 = \square$



3. Λύνω τα παρακάτω προβλήματα:

α. Ένας σκυλάκι έχει 4 πόδια. Μπορείς να βρεις πόσα πόδια θα έχουν τα 9 σκυλάκια;



Υπολογίζω με πολλαπλασιασμό:

Απάντηση: _____

β. Ο Κώστας έχει 8 αυτοκινήτα. Ο Μάνος έχει τα τριπλάσια. Πόσα αυτοκινήτα έχει ο Μάνος;



Υπολογίζω με πολλαπλασιασμό:

Απάντηση: _____

γ. Η Κατερίνα κάνει μάθημα πιάνου 2 ώρες την ημέρα. Πόσες ώρες πιάνο κάνει την εβδομάδα;



Υπολογίζω με πολλαπλασιασμό:

Απάντηση: _____