

















ΟΝΟΜΑ: \_\_\_\_\_

## Μαθηματικά 4η Ενότητα






### 25. Οι αριθμοί μέχρι το 50 (3)

1. Γράφω τους αριθμούς από το 1 έως το 59.


2. Συνεχίζω να μετρώ.



3. Γράφω τον προηγούμενο και το επόμενο αριθμό.



4. Βάζω τα σύμβολα  $<$ ,  $>$ ,  $=$ .

