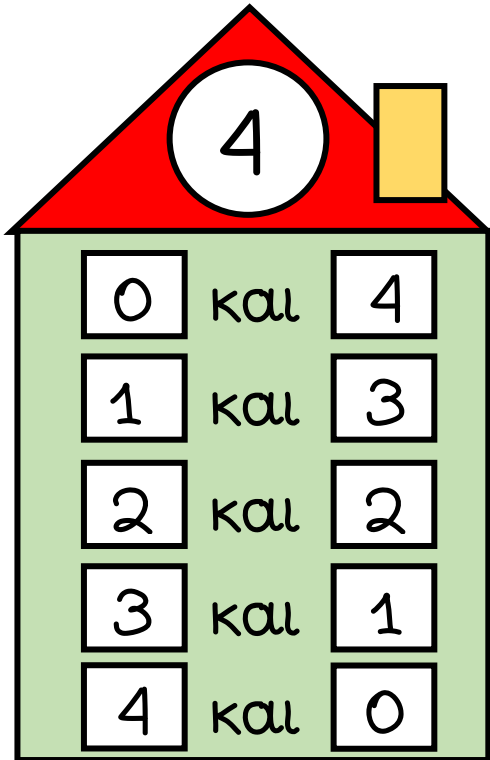


ΟΝΟΜΑ: _____

Μαθηματικά 1η Ενότητα

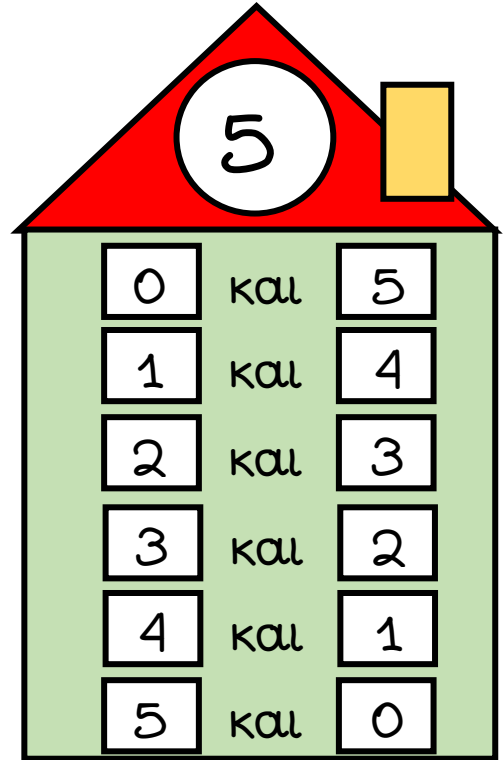
7. Πρόσθεση και ανάλυση των αριθμών μέχρι το 5 (2)

1. Μαθαίνω τα ζευγαράκια του 4 και του 5.



A house-shaped graphic with a red roof and a yellow chimney. The number 4 is written in a white circle on the roof. The main body of the house is green and contains a table of number pairs.


0	και	4
1	και	3
2	και	2
3	και	1
4	και	0



A house-shaped graphic with a red roof and a yellow chimney. The number 5 is written in a white circle on the roof. The main body of the house is green and contains a table of number pairs.

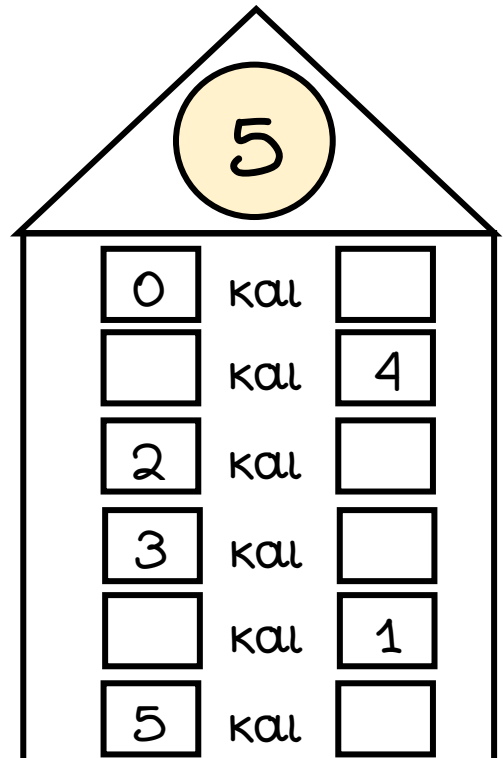

0	και	5
1	και	4
2	και	3
3	και	2
4	και	1
5	και	0

2. Συμπληρώνω τους αριθμούς που λείπουν από τα σπιτάκια.



A house-shaped graphic with a white roof and a yellow circle on the roof containing the number 4. The main body of the house is white and contains a table with missing numbers.


<input type="text"/>	και	4
1	και	<input type="text"/>
<input type="text"/>	και	2
3	και	<input type="text"/>
<input type="text"/>	και	0




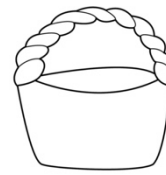
A house-shaped graphic with a white roof and a yellow circle on the roof containing the number 5. The main body of the house is white and contains a table with missing numbers.

0	και	<input type="text"/>
<input type="text"/>	και	4
2	και	<input type="text"/>
3	και	<input type="text"/>
<input type="text"/>	και	1
5	και	<input type="text"/>


3. Μοιράζω τα 4 αυγά στα καλάθια με διαφορετικούς τρόπους.




και



και



και



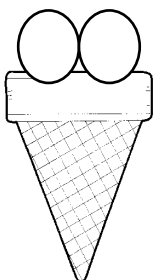
και



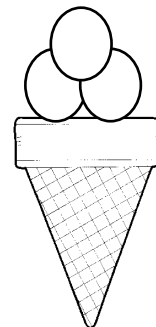
και



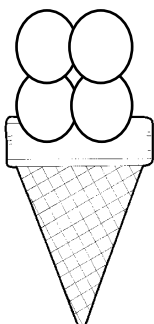
4. Βάζω όσες μπάλες χρειάζονται σε κάθε χωνάκι ώστε κάθε παγωτό να έχει πάντα 5 μπάλες.



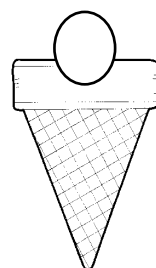
και



και



και



και