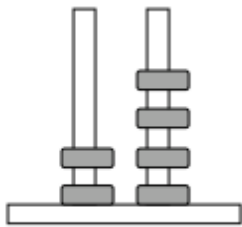


ΟΝΟΜΑ: _____

ΜΑΘΗΜΑΤΙΚΑ 5^η ΕΝΟΤΗΤΑ

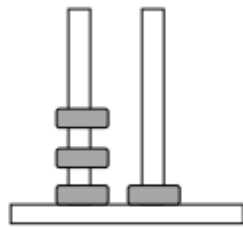
Κεφ. 33 Οργάνωση συλλογών - Αριθμοί μέχρι το 50 (2)

1. Γράφω τους αριθμούς όπως το παράδειγμα.

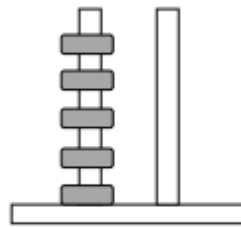


Δ Μ

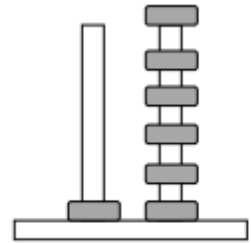
2 4



Δ Μ

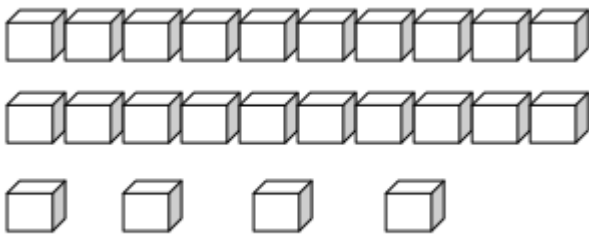


Δ Μ

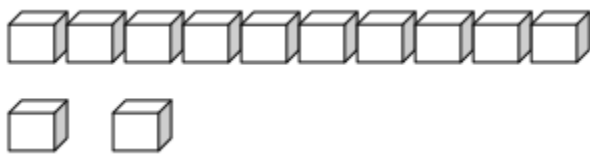


Δ Μ

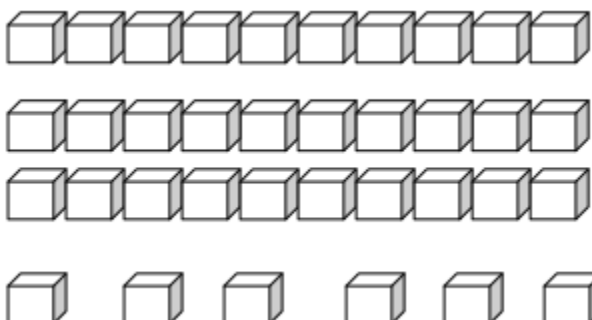
2. Μετρώ τα κυβάκια και υπολογίζω όπως το παράδειγμα.



$$\boxed{10} + \boxed{10} + \boxed{4} = \boxed{}$$



$$\boxed{} + \boxed{} = \boxed{}$$



$$\boxed{} + \boxed{} + \boxed{} + \boxed{} = \boxed{}$$