


ΟΝΟΜΑ: \_\_\_\_\_

## Μαθηματικά 7η Ενότητα


### 48. Υπολογισμοί - Επιστροφή στην πεντάδα (2)

1. Βρίσκω τα ζευγαράκια του 5.


$$5 + \underline{\quad} = 9$$




$$5 + \underline{\quad} = 8$$



$$5 + \underline{\quad} = 10$$



$$5 + \underline{\quad} = 6$$



$$5 + \underline{\quad} = 7$$

2. Κάνω τις παρακάτω πράξεις, με όποιο τρόπο μπορώ.

$$12 + 5 = \underline{\quad}$$

$$9 + 5 = \underline{\quad}$$


$$15 + 3 = \underline{\quad}$$

$$8 + 8 = \underline{\quad}$$

$$14 + 5 = \underline{\quad}$$

$$5 + 7 = \underline{\quad}$$

$$15 + 4 = \underline{\quad}$$



$$15 - 5 = \underline{\quad}$$

$$9 - 5 = \underline{\quad}$$

$$14 - 7 = \underline{\quad}$$

$$15 - 4 = \underline{\quad}$$

$$16 - 8 = \underline{\quad}$$

$$8 - 5 = \underline{\quad}$$

$$15 - 2 = \underline{\quad}$$